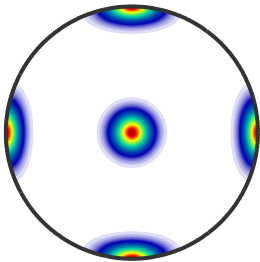
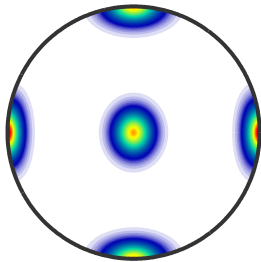


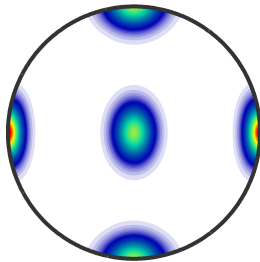
$\lambda_3 = -10$



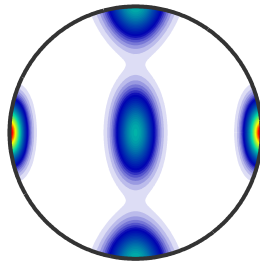
$\lambda_3 = -5$



$\lambda_3 = 0$



$\lambda_3 = 5$



$\lambda_3 = 10$

